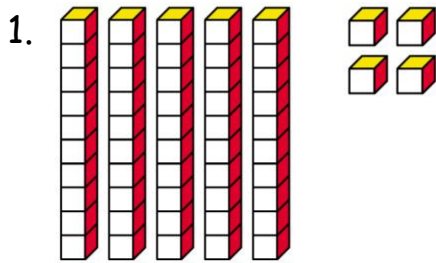


Name _____

Date _____

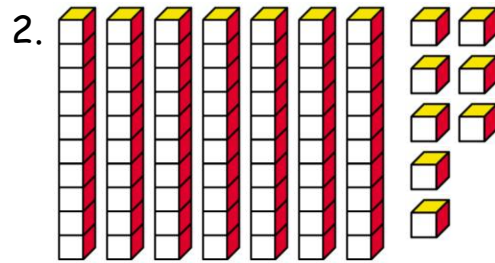
Place Value

Look at the pictures. Write how many tens and ones there are. Then write the number in standard form.



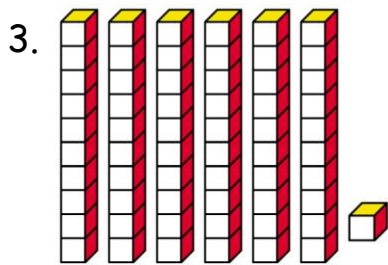
_____ tens _____ ones

 standard form



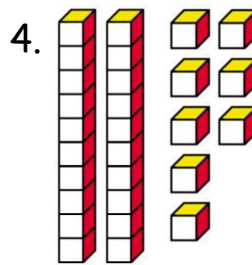
_____ tens _____ ones

 standard form



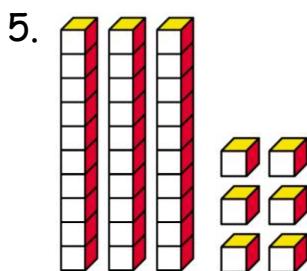
_____ tens _____ ones

 standard form



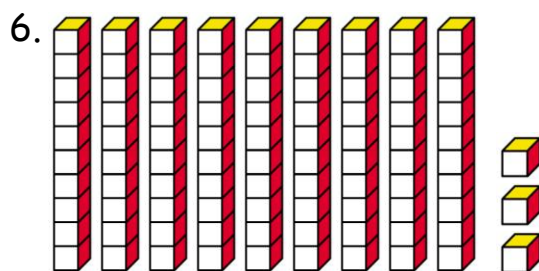
_____ tens _____ ones

 standard form



_____ tens _____ ones

 standard form



_____ tens _____ ones

 standard form